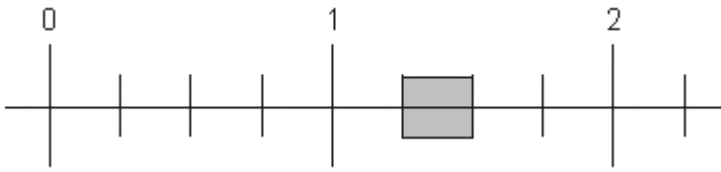


Application 1

1. Part of this number line is shaded. Circle **all** the numbers below that belong in the shaded part of the number line.



1.1

1.4

$1\frac{1}{3}$

$1\frac{1}{5}$

2. Write these numbers in order. One has been done for you.


3.03

3.23

3.3

3

3.2



3. Circle the number **closest** in value to **0.1**

0.01

0.05

0.11

0.2


0.9

Answers:

1. Two numbers circled as shown:

1.1 **1.4** **$1\frac{1}{3}$** $1\frac{1}{5}$

2. All four numbers correctly placed as shown:



3. 0.01 0.05 **0.11** 0.2 0.9

